



# Cambridge IGCSE™

---

## DESIGN & TECHNOLOGY

0445/12

Paper 1 Product Design

May/June 2022

1 hour 15 minutes



You must answer on the two pre-printed A3 answer sheets.

You will need: Two A3 pre-printed answer sheets (enclosed)  
Standard drawing equipment  
Coloured pencils

---

### INSTRUCTIONS

- Answer **one** question.
- Use an HB pencil for any drawings and a black or dark blue pen for any writing.
- Write your name, centre number and candidate number in the space on **both** pre-printed answer sheets.
- Answer in the space provided on the answer sheets.
- Do **not** use an erasable pen, staples, paper clips, glue or correction fluid.
- Do **not** write on any bar codes.
- You may use a calculator.
- You may use standard drawing equipment, including coloured pencils.
- At the end of the examination, hand in your named A3 answer sheets. Do **not** fasten them together and do **not** punch holes in the sheets or tie with string.

### INFORMATION


- The total mark for this paper is 50.
- The number of marks for each question or part question is shown in brackets [ ].
- All dimensions are in millimetres.

---

This document has 4 pages.

Answer **one** question only on the A3 pre-printed answer sheets provided.


- 1 People who play guitars often need to place their guitar on a stand during a performance.



Design a stand which could be used to hold a guitar, ready for easy access, during a performance.

- (a) List **four** additional points about the function of such a stand that you consider to be important. [4]
- (b) Use sketches and notes to show **two** ways that could be used to prevent damage to a guitar whilst on a stand. [4]
- (c) Develop and sketch **three** separate ideas for the stand. [12]
- (d) Evaluate your three ideas. Choose **one** idea to develop further and justify your choice. [8]
- (e) Draw, using a method of your own choice, a full solution to the design problem. Include construction details and important dimensions. [12]
- (f) Suggest **two** suitable specific materials for the solution you have drawn in part (e) and give reasons for your choice. [4]
- (g) Outline a method that could be used to manufacture **one** part of your solution drawn in part (e). Include the names of the tools used. [6]


- 2 A musical instrument shop wishes to promote a sale of musical instruments.



Design a display board that promotes the sale of musical instruments. The display board will be placed on the paved area outside the shop and must be visible from all directions.

- (a) List **four** additional points about the function of such a display board that you consider to be important. [4]
- (b) Use sketches and notes to show **two** methods that can be used to promote the musical instrument sale. [4]
- (c) Develop and sketch **three** separate ideas for the display board. [12]
- (d) Evaluate your three ideas. Choose **one** idea to develop further and justify your choice. [8]
- (e) Draw, using a method of your own choice, a full solution to the problem. Include construction details and important dimensions. [12]
- (f) Suggest **two** suitable specific materials for the solution you have drawn in part (e) and give reasons for your choice. [4]
- (g) Outline a method that could be used to manufacture **one** part of your solution drawn in part (e). Include the names of the tools used. [6]

3 Musicians often need to turn pages of music when they are performing.



Design a music stand which will turn each page of music when required.

- (a) List **four** additional points about the function of such a music stand that you consider to be important. [4]
- (b) Use sketches and notes to show **two** methods which could be used to control the turning of a page of music. [4]
- (c) Develop and sketch **three** separate ideas for the music stand. [12]
- (d) Evaluate your three ideas. Choose **one** idea to develop further and justify your choice. [8]
- (e) Draw, using a method of your own choice, a full solution to the problem. Include construction details and important dimensions. [12]
- (f) Suggest **two** suitable specific materials for the solution you have drawn in part (e) and give reasons for your choice. [4]
- (g) Outline a method that could be used to manufacture **one** part of your solution drawn in part (e). Include the names of the tools used. [6]

---

Permission to reproduce items where third-party owned material protected by copyright is included has been sought and cleared where possible. Every reasonable effort has been made by the publisher (UCLES) to trace copyright holders, but if any items requiring clearance have unwittingly been included, the publisher will be pleased to make amends at the earliest possible opportunity.

To avoid the issue of disclosure of answer-related information to candidates, all copyright acknowledgements are reproduced online in the Cambridge Assessment International Education Copyright Acknowledgements Booklet. This is produced for each series of examinations and is freely available to download at [www.cambridgeinternational.org](http://www.cambridgeinternational.org) after the live examination series.

Cambridge Assessment International Education is part of Cambridge Assessment. Cambridge Assessment is the brand name of the University of Cambridge Local Examinations Syndicate (UCLES), which is a department of the University of Cambridge.